



NORTH MEAD
PRIMARY ACADEMY

Home Learning

Year 6

Week Beginning: 1st June

Everyday Useful Websites

www.twinkl.co.uk/offer and enter the code UKTWINKLHELPS

<https://ukhosted111.renlearn.co.uk/6712255/Public/RPM/Login/Login.aspx?srcID=shttps://www.myon.co.uk/login/index.html>

<https://www.mathletics.com/uk/>

https://beinternetawesome.withgoogle.com/en_us/interland

<https://www.bbc.co.uk/bitesize/levels/zbr9wmn>

<https://play.ttrockstars.com/auth/school/student/39903>

<https://2simple.com/purple-mash/free-14-day-trial/>

<https://www.topmarks.co.uk/english-games/5-7-years/letters-and-sounds>

<https://whiterosemaths.com/resources/schemes-of-learning/primary-sols/>

<https://mathsbot.com/>

<https://www.123homeschool4me.com/home-school-free-printables/#>

<https://www.3plearning.com/distance-teaching/>

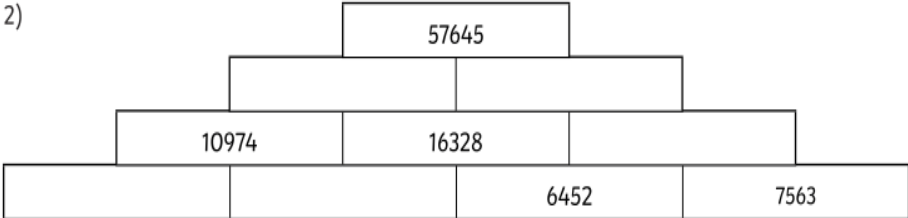
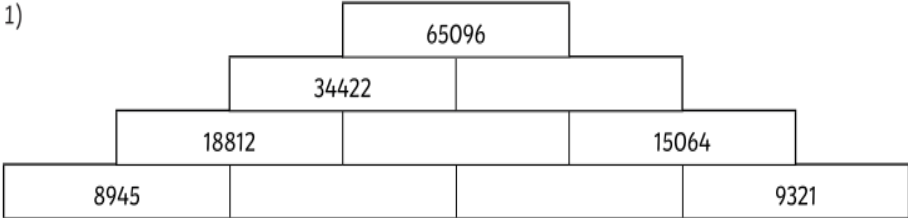
<https://wow.boomlearning.com/>

<https://www.emile-education.com/schools-corona-virus/>

	Task 1	Task 2																																																						
Monday	<p>https://www.youtube.com/watch?v=vbuq7w3ZDUQ</p> <p>Watch La Luna by Pixar.</p> <p>Draw a story map of what happened in the short film. This can include pictures, a path, key words and feelings.</p>	<p>An Amazing Fact a Day</p> <p>Magic Squares</p> <p>Complete these magic squares.</p> <p>Don't use the same number twice in a square and the numbers must add up to the same number in each row, column and diagonal line.</p> <p>a) <table border="1" style="display: inline-table; vertical-align: middle;"> <tr><td>8</td><td></td><td>9</td></tr> <tr><td></td><td>6</td><td></td></tr> <tr><td>3</td><td></td><td>4</td></tr> </table></p> <p>b) <table border="1" style="display: inline-table; vertical-align: middle;"> <tr><td>13</td><td>9</td><td>8</td></tr> <tr><td></td><td></td><td></td></tr> <tr><td>12</td><td></td><td></td></tr> </table></p> <p>c) <table border="1" style="display: inline-table; vertical-align: middle;"> <tr><td>3</td><td></td><td></td></tr> <tr><td>10</td><td>5</td><td></td></tr> <tr><td>2</td><td></td><td></td></tr> </table></p> <p>d) <table border="1" style="display: inline-table; vertical-align: middle;"> <tr><td>2</td><td>7</td><td>6</td></tr> <tr><td>9</td><td></td><td>1</td></tr> <tr><td></td><td>3</td><td></td></tr> </table></p> <p>e) <table border="1" style="display: inline-table; vertical-align: middle;"> <tr><td></td><td>2</td><td></td></tr> <tr><td></td><td>7</td><td></td></tr> <tr><td>4</td><td></td><td>5</td></tr> </table></p> <p>f) <table border="1" style="display: inline-table; vertical-align: middle;"> <tr><td>6</td><td></td><td>11</td></tr> <tr><td></td><td></td><td></td></tr> <tr><td>7</td><td></td><td>12</td></tr> </table></p>	8		9		6		3		4	13	9	8				12			3			10	5		2			2	7	6	9		1		3			2			7		4		5	6		11				7		12
8		9																																																						
	6																																																							
3		4																																																						
13	9	8																																																						
12																																																								
3																																																								
10	5																																																							
2																																																								
2	7	6																																																						
9		1																																																						
	3																																																							
	2																																																							
	7																																																							
4		5																																																						
6		11																																																						
7		12																																																						

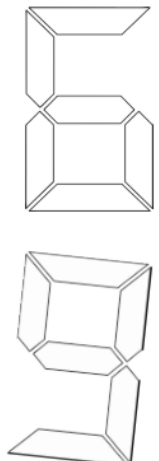
	Task 1	Task 2																
Tuesday	<p>https://www.youtube.com/watch?v=vbuq7w3ZDUQ</p> <p>Watch La Luna.</p> <p>Write a diary entry from the boy's point of view. What happened that night? What did he see? Who was with him?</p> <ul style="list-style-type: none"> -Where have the stars come from? -What will happen next? -Can you describe the boy's feelings? -What do they do with the stars? 	<p>Use addition and subtraction calculations to complete these pyramids. The first one has been done for you.</p> <div style="text-align: center;"> <table border="1" style="margin: auto;"> <tr><td colspan="4">170366</td></tr> <tr><td colspan="2">103368</td><td colspan="2">66998</td></tr> <tr><td colspan="1">59019</td><td colspan="2">44349</td><td colspan="1">22649</td></tr> <tr><td colspan="1">27563</td><td colspan="1">31456</td><td colspan="1">12893</td><td colspan="1">9756</td></tr> </table> </div> <p>Use the column method to help you to add and subtract 4 to 6 digit numbers. You need to add two values on the bottom to get the answer on top. For example: $12896 + 9756 = 22649$.</p>	170366				103368		66998		59019	44349		22649	27563	31456	12893	9756
170366																		
103368		66998																
59019	44349		22649															
27563	31456	12893	9756															


Now have a go with these two number pyramids.



Task 1

Task 2

<p>Wednesday</p>	<p>Create a movie poster for the film “La luna”</p> <p>How will you convince other’s to watch the trailer?</p>	<p style="text-align: right;">An Amazing Fact a Day</p> <h2 style="text-align: center;">Number Puzzles</h2> <p>Amazing Fact If you take any number, double it, add 10, divide by 2 and subtract your original number, the answer will always be 5.</p> <p>Challenge See if this is true.</p> <p>1. Double 5 = <input type="text"/> + 10 = <input type="text"/> ÷ 2 = <input type="text"/> - 5 = <input type="text"/></p> <p>2. Double 7 = <input type="text"/> + 10 = <input type="text"/> ÷ 2 = <input type="text"/> - 7 = <input type="text"/></p> <p>3. Double 3 = <input type="text"/> + 10 = <input type="text"/> ÷ 2 = <input type="text"/> - 3 = <input type="text"/></p> <p>4. Double 9 = <input type="text"/> + 10 = <input type="text"/> ÷ 2 = <input type="text"/> - 9 = <input type="text"/></p> <p>5. Double 4 = <input type="text"/> + 10 = <input type="text"/> ÷ 2 = <input type="text"/> - 4 = <input type="text"/></p> <p>6. Double 2 = <input type="text"/> + 10 = <input type="text"/> ÷ 2 = <input type="text"/> - 2 = <input type="text"/></p> 
-------------------------	--	--

	Task 1	Task 2
<p>Thursday</p>	<p>Create an acrostic poem for the words:</p> <p>S T A R R Y N I G H T</p>	 <p>Have a go at making rainbow crafts out of paper or any resources you can find in the house.</p>

	Task 1	Task 2
Friday	<p>Create a fact file about the Northern Lights (the Aurora Borealis)</p> <p>Include: What is it? Where is it? When do the Northern Lights occur? Why does it happen? Fun facts</p>	<p>Have a go at creating your own fruit sculpture. Here are just some ideas but feel free to create your own sculptures.</p> 